





Pic du Midi Cycle 1



Combien de coupoles peux -tu compter ?

Pic du Midi Cycle 1



Combien de coupoles peux -tu compter ?