



SEMAINE DES MATHS 2026

PLACE UN JETON SUR LES CASES QUI DÉSIGNENT OU CORRESPONDENT À UN DEMI.

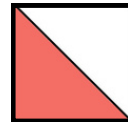
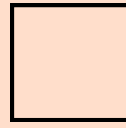
C'EST LA PARTIE EN ROSE À CONSIDÉRER !

CE1

un demi

$$\frac{1}{2}$$

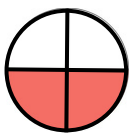

le tout :



le tout :



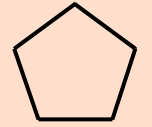
le tout :



une moitié



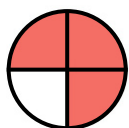
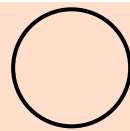
le tout :



le tout :



le tout :




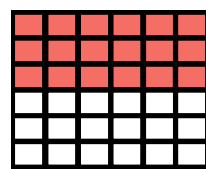
le tout :



le tout :



le tout :



2

