



SEMAINE DES MATHS 2026

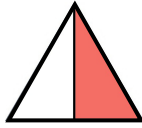
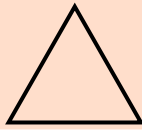
PLACE UN JETON SUR LES CASES QUI DÉSIGNENT OU CORRESPONDENT À UN DEMI.

C'EST LA PARTIE EN ROSE À CONSIDÉRER !

CE2

un demi

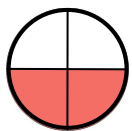

le tout :



un quart
et
un quart

deux quarts

le tout :

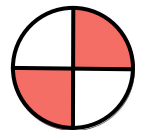



$\frac{1}{2}$


le tout :



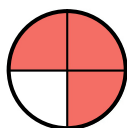
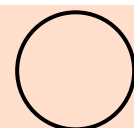
le tout :



le tout :



le tout :



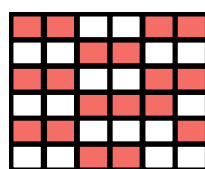
un quart
et
un quart
et
un quart

le tout :

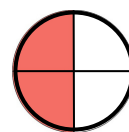
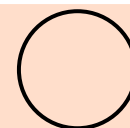


$\frac{2}{1}$

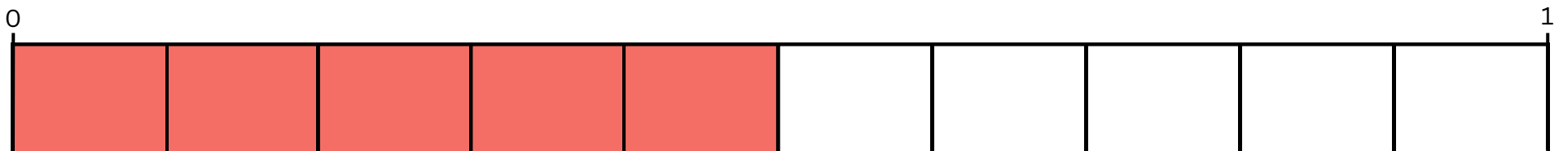
le tout :



le tout :



quatre huitièmes



É G A L I T É S